



Ministry of Education and Youth

Primary Exit Profile (PEP 5)

June 2022

Performance Task - Mathematics

Time: 1 hour 30 minutes

Write your name and the name of your school below:

Name of Student

Name of School

DO NOT OPEN THIS BOOKLET UNTIL TOLD TO DO SO

MOEYI/SAU/

1

PLEASE DO NOT WRITE IN THIS AREA



[SERIAL]

53

52

51

50

49

48

47

46

45

44

43

42

41

40

39

38

37

36

35

34

33

32

31

30

29

28

27

26

25

24

23

22

21

20

19

18

17

16

15

14

13

12

11

10

9

8

7

6

5

4

3

2

1



- 53
- 52
- 51
- 50
- 49
- 48
- 47
- 46
- 45
- 44
- 43
- 42
- 41
- 40
- 39
- 38
- 37
- 36
- 35
- 34
- 33
- 32
- 31
- 30
- 29
- 28
- 27
- 26
- 25
- 24
- 23
- 22
- 21
- 20
- 19
- 18
- 17
- 16
- 15
- 14
- 13
- 12
- 11
- 10
- 9
- 8
- 7
- 6
- 5
- 4
- 3
- 2
- 1

GENERAL INSTRUCTIONS:

This task has four parts: Part 1, Part 2, Part 3, and Part 4.

Read the information in each part carefully. Use the information provided to answer ALL questions in each part.









53
52
51
50
49
48
47
46
45
44
43
42
41
40
39
38
37
36
35
34
33
32
31
30
29
28
27
26
25
24
23
22
21
20
19
18
17
16
15
14
13
12
11
10
9
8
7
6
5
4
3
2
1

Part 1: Most Popular Venue

A survey was done to find out which of the three venues was most popular among the students. The pictograph below shows the results of the survey.

Pictograph Showing the Number of Students who Selected Different Venues for the Class Trip

Venue	Number of Students
City Zoo	
Windy Water Park	
Sonic Adventure Park	
Key:	 = 10 students  = 2 students  = 5 students

Question 1

How many students responded to the survey?



53
52
51
50
49
48
47
46
45
44
43
42
41
40
39
38
37
36
35
34
33
32
31
30
29
28
27
26
25
24
23
22
21
20
19
18
17
16
15
14
13
12
11
10
9
8
7
6
5
4
3
2
1

Question 2

Which venue is **MOST** popular?

Question 3

What fraction of the students chose **Windy Water Park**?

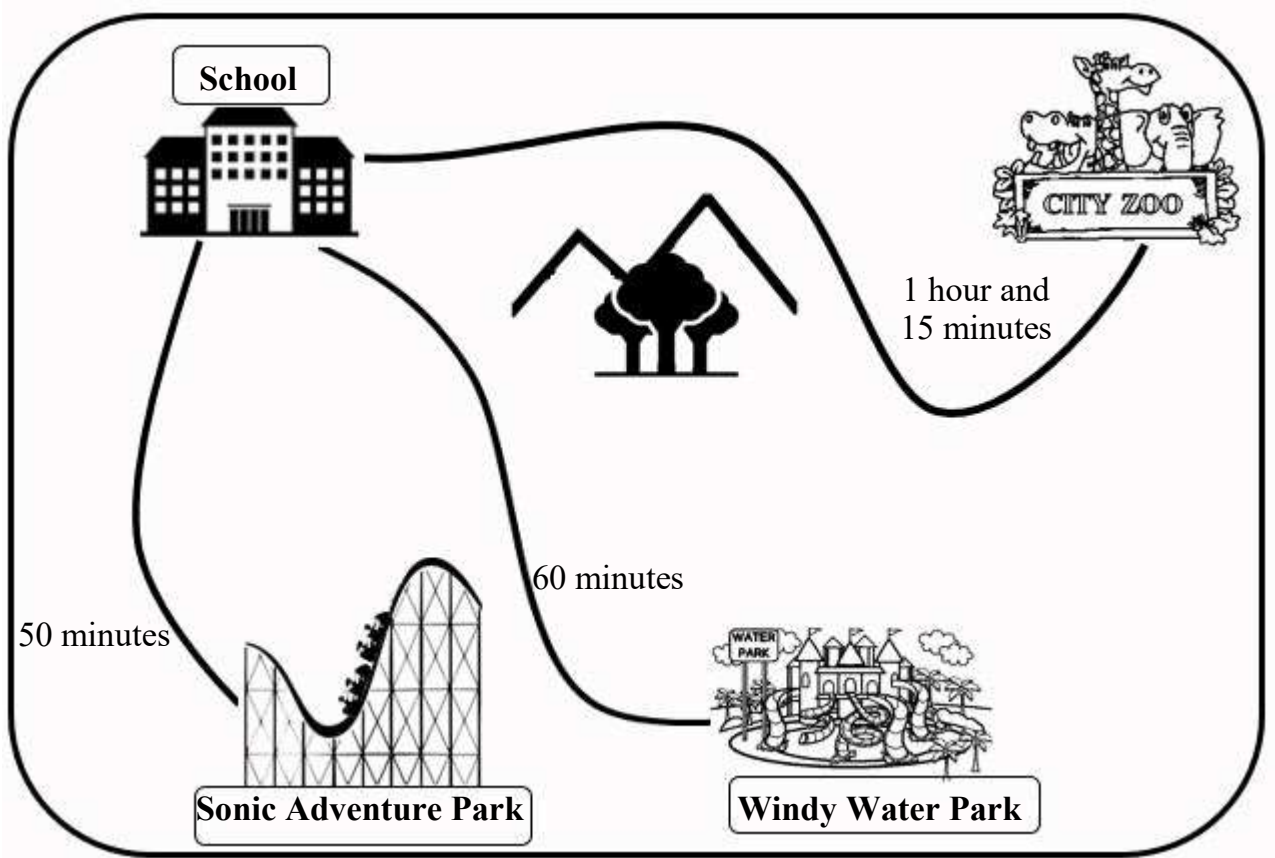


53
52
51
50
49
48
47
46
45
44
43
42
41
40
39
38
37
36
35
34
33
32
31
30
29
28
27
26
25
24
23
22
21
20
19
18
17
16
15
14
13
12
11
10
9
8
7
6
5
4
3
2
1

Part 2: Time Taken to Get to the Venues

On the day of the trip, buses will be provided to transport students from the school to the venue and back to the school. The P.T.A. is concerned about the time it will take to get to each venue. The map below shows the school, the three venues, and the time it will take to get to each venue.

Map Showing the School, the Three Venues and the Time it will take to Travel to each Venue



53
52
51
50
49
48
47
46
45
44
43
42
41
40
39
38
37
36
35
34
33
32
31
30
29
28
27
26
25
24
23
22
21
20
19
18
17
16
15
14
13
12
11
10
9
8
7
6
5
4
3
2
1

Question 4

A. The buses will leave the school at **8:00 a.m.** In the spaces provided in the table below write:

- the time that the students will arrive at each venue
- the latest time that they will have to leave each venue in order to be back at school by **6:00 p.m.**

Use the map to help you.

Venue	Arrival Time	Departure Time
City Zoo		
Windy Water Park		
Sonic Adventure Park		

B. Which venue will allow students the **most time** to enjoy the attraction?



53
52
51
50
49
48
47
46
45
44
43
42
41
40
39
38
37
36
35
34
33
32
31
30
29
28
27
26
25
24
23
22
21
20
19
18
17
16
15
14
13
12
11
10
9
8
7
6
5
4
3
2
1

Part 3: Total Cost of Trip

The trip will be on Tuesday, June 28, 2022. The P.T.A. will pay the entire cost of the trip. The total cost of the trip includes:

- **transportation for all students**
- **entry fee for all students**

The **total transportation cost** for all students to visit each venue is as follows:

City Zoo	-	\$15,000.00
Windy Water Park	-	\$12,000.00
Sonic Adventure Park	-	\$10,000.00

Table 1 shows the **entry fee** for each of the three venues.

Table 1: Entry Fee to each of the Three Venues

	City Zoo	Windy Water Park	Sonic Adventure Park
Entry Fee to Venue	\$250.00 per student	Groups of less than 75 students - \$200.00 per student Groups of 75 students or MORE - \$170.00 per student	Mondays - Fridays \$150.00 per student Saturdays & Sundays \$300.00 per student



Question 5

There are **one hundred** students in grade 5. What is the **total cost** the P.T.A. will pay to visit **EACH** venue, if all **100** students go on the trip? *Show your work.*

City Zoo

Windy Water Park

Sonic Adventure Park

- 53
- 52
- 51
- 50
- 49
- 48
- 47
- 46
- 45
- 44
- 43
- 42
- 41
- 40
- 39
- 38
- 37
- 36
- 35
- 34
- 33
- 32
- 31
- 30
- 29
- 28
- 27
- 26
- 25
- 24
- 23
- 22
- 21
- 20
- 19
- 18
- 17
- 16
- 15
- 14
- 13
- 12
- 11
- 10
- 9
- 8
- 7
- 6
- 5
- 4
- 3
- 2
- 1



- 53
- 52
- 51
- 50
- 49
- 48
- 47
- 46
- 45
- 44
- 43
- 42
- 41
- 40
- 39
- 38
- 37
- 36
- 35
- 34
- 33
- 32
- 31
- 30
- 29
- 28
- 27
- 26
- 25
- 24
- 23
- 22
- 21
- 20
- 19
- 18
- 17
- 16
- 15
- 14
- 13
- 12
- 11
- 10
- 9
- 8
- 7
- 6
- 5
- 4
- 3
- 2
- 1

Part 4: Recommendation to the P.T.A.

Question 6

Which venue would you recommend that the P.T.A. select for the class trip?

Give **TWO** reasons to support your answer, using evidence from the task.



This page is intentionally blank

- 53
- 52
- 51
- 50
- 49
- 48
- 47
- 46
- 45
- 44
- 43
- 42
- 41
- 40
- 39
- 38
- 37
- 36
- 35
- 34
- 33
- 32
- 31
- 30
- 29
- 28
- 27
- 26
- 25
- 24
- 23
- 22
- 21
- 20
- 19
- 18
- 17
- 16
- 15
- 14
- 13
- 12
- 11
- 10
- 9
- 8
- 7
- 6
- 5
- 4
- 3
- 2
- 1



53

52

51

50

49

48



Primary Exit Profile - 2022

47

Name: _____

46

Date of Birth: _____

45

44

School Name: _____

43

42

School Code: _____

41

40

Centre: _____

39

38

Parish: _____

37

PERFORMANCE TASK 2022 - MATHEMATICS

36

Name of Test: _____

35

34

33

32

31

30

29

28

27

26

25

24

23

GENERAL INSTRUCTIONS

22

21

Read the instructions below before answering the questions in the booklet:

20

19

18

17

1. Your booklet contains six (6) questions. Write the answer to all six questions in your test booklet.

16

15

2. Read each instruction carefully before responding to the question(s) in each section.

14

13

3. Ensure that all questions are answered.

12

11

DO NOT OPEN THIS BOOKLET UNTIL TOLD TO DO SO

10

9

8

BOOKLET # ASSIGNED

7



6

5

MOEY/SAU/

12

4

PLEASE DO NOT WRITE IN THIS AREA

3



[SERIAL]

2

1

↓ IDENTIFICATION NUMBER

	0	1	2	3	4	5	6	7	8	9
	0	1	2	3	4	5	6	7	8	9
	0	1	2	3	4	5	6	7	8	9
	0	1	2	3	4	5	6	7	8	9
	0	1	2	3	4	5	6	7	8	9
	0	1	2	3	4	5	6	7	8	9
	0	1	2	3	4	5	6	7	8	9
	0	1	2	3	4	5	6	7	8	9
	0	1	2	3	4	5	6	7	8	9
	0	1	2	3	4	5	6	7	8	9

DO NOT WRITE OR MAKE ANY MARK IN THIS BLOCK OR CHANGE ANYTHING IN IT

Absent

SCHOOL CODE

	0	1	2	3	4	5	6	7	8	9
	0	1	2	3	4	5	6	7	8	9
	0	1	2	3	4	5	6	7	8	9
	0	1	2	3	4	5	6	7	8	9
	0	1	2	3	4	5	6	7	8	9