



Ministry of Education and Youth

Primary Exit Profile (PEP 4)

June 2022

Performance Task - Mathematics

Time: 1 hour 30 minutes

Write your name and the name of your school below:

Name of Student

Name of School

DO NOT OPEN THIS BOOKLET UNTIL TOLD TO DO SO

MOEYI/SAU/G4PT/Mathematics/'22

PLEASE DO NOT WRITE IN THIS AREA



{bookletNo}

- 53
- 52
- 51
- 50
- 49
- 48
- 47
- 46
- 45
- 44
- 43
- 42
- 41
- 40
- 39
- 38
- 37
- 36
- 35
- 34
- 33
- 32
- 31
- 30
- 29
- 28
- 27
- 26
- 25
- 24
- 23
- 22
- 21
- 20
- 19
- 18
- 17
- 16
- 15
- 14
- 13
- 12
- 11
- 10
- 9
- 8
- 7
- 6
- 5
- 4
- 3
- 2
- 1



- 53
- 52
- 51
- 50
- 49
- 48
- 47
- 46
- 45
- 44
- 43
- 42
- 41
- 40
- 39
- 38
- 37
- 36
- 35
- 34
- 33
- 32
- 31
- 30
- 29
- 28
- 27
- 26
- 25
- 24
- 23
- 22
- 21
- 20
- 19
- 18
- 17
- 16
- 15
- 14
- 13
- 12
- 11
- 10
- 9
- 8
- 7
- 6
- 5
- 4
- 3
- 2
- 1

This page is intentionally blank



- 53
- 52
- 51
- 50
- 49
- 48
- 47
- 46
- 45
- 44
- 43
- 42
- 41
- 40
- 39
- 38
- 37
- 36
- 35
- 34
- 33
- 32
- 31
- 30
- 29
- 28
- 27
- 26
- 25
- 24
- 23
- 22
- 21
- 20
- 19
- 18
- 17
- 16
- 15
- 14
- 13
- 12
- 11
- 10
- 9
- 8
- 7
- 6
- 5
- 4
- 3
- 2
- 1

This page is intentionally blank



53
52
51
50
49
48
47
46
45
44
43
42
41
40
39
38
37
36
35
34
33
32
31
30
29
28
27
26
25
24
23
22
21
20
19
18
17
16
15
14
13
12
11
10
9
8
7
6
5
4
3
2
1

Use the information below to decide how you will help their parents.

Morning Routine

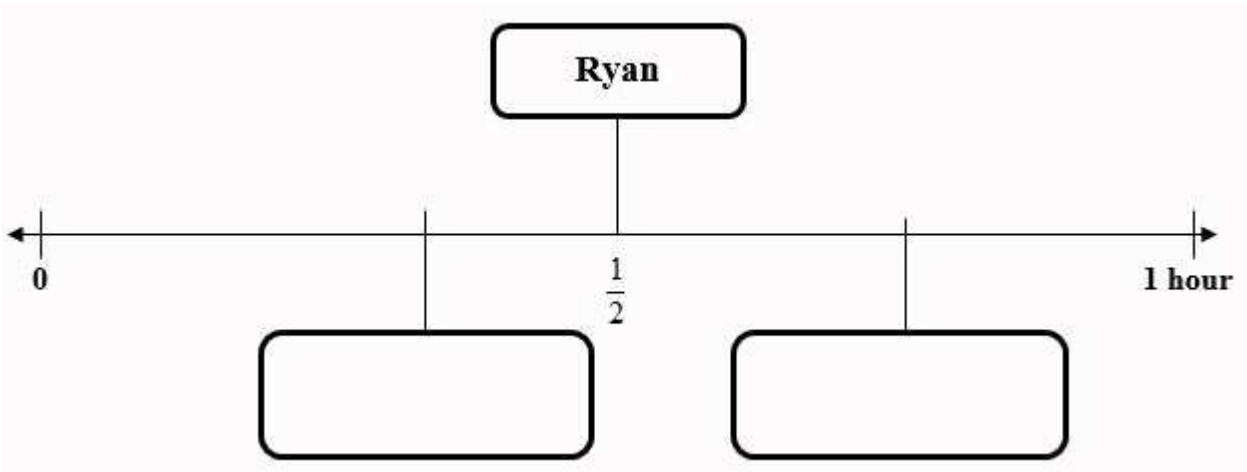
Table 1 shows the times Ryan, Sheldon and Anthony take to complete their morning routine.

Table 1 – Time That the Boys Take to Complete Their Morning Routine

Morning Routine			
Name of Boys	Time Taken to Bathe and Get Dressed	Time Taken to Eat	Time Taken to Brush Teeth
Sheldon	$\frac{3}{4}$ hour	10 minutes	2 minutes
Anthony	20 minutes	15 minutes	5 minutes
Ryan	$\frac{1}{2}$ hour	15 minutes	3 minutes

Question 1

Use the information given in Table 1 to complete the number line below. Write Sheldon and Anthony's name in the appropriate box to show the amount of time it takes each of them to bathe and get dressed. Ryan's name is already written in the correct box to show the time he takes to bathe and get dressed.



Question 2

2A. Which activity in the morning routine takes the **LEAST** amount of time for the boys to complete? Use the information given in Table 1 to help you.

Tick the box beside the activity you have chosen.


Bathe and Get Dressed

Eat

Brush teeth

2B. Who takes the **MOST** time to get ready for school? Use the information given in Table 1 to help you.

Show how you know.

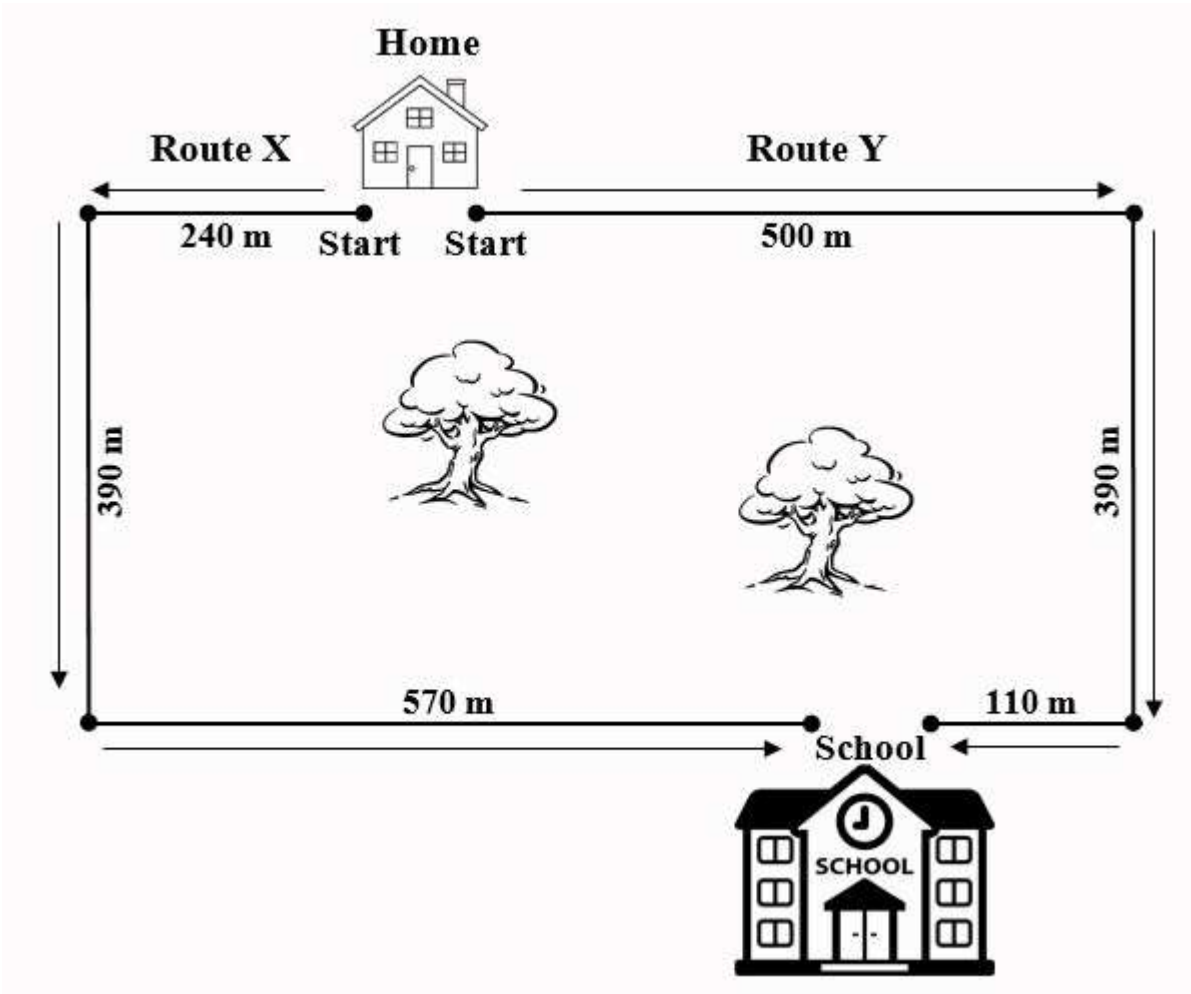


53
52
51
50
49
48
47
46
45
44
43
42
41
40
39
38
37
36
35
34
33
32
31
30
29
28
27
26
25
24
23
22
21
20
19
18
17
16
15
14
13
12
11
10
9
8
7
6
5
4
3
2
1

Route to School

The boys walk to school every morning. They can walk from home to school using two routes, **Route X** or **Route Y**.

Examine the map below. It shows the boys' home, their school, and the two routes they can use to walk from their home to school.



Question 3

3A. Which Route is longer?

Route X

Route Y



3B. Table 2 shows the time it takes the boys to walk different distances. Examine Table 2 carefully then complete the blank spaces with the appropriate distance and/or time.

Table 2 – Time Taken to Walk Different Distances

Distance	Time Taken
200 m	3 minutes
400 m	6 minutes
600 m	9 minutes
_____ m	12 minutes
1000 m	_____ minutes
_____ m	_____ minutes

3C. Use the map in Question 3A and the information in Table 2 to complete the sentences below.

I. It takes the boys _____ minutes to walk along Route X.

II. It takes the boys _____ minutes to walk along Route Y.



53
52
51
50
49
48
47
46
45
44
43
42
41
40
39
38
37
36
35
34
33
32
31
30
29
28
27
26
25
24
23
22
21
20
19
18
17
16
15
14
13
12
11
10
9
8
7
6
5
4
3
2
1

Recommendation to the Parents

Question 4

- 4A. Which boy would you recommend wake up first to begin his morning routine?
Give **ONE** reason to support your answer.

- 4B. Which route would you recommend the boys use to walk from home to school? Give **ONE** reason to support your answer.



This page is intentionally blank

- 53
- 52
- 51
- 50
- 49
- 48
- 47
- 46
- 45
- 44
- 43
- 42
- 41
- 40
- 39
- 38
- 37
- 36
- 35
- 34
- 33
- 32
- 31
- 30
- 29
- 28
- 27
- 26
- 25
- 24
- 23
- 22
- 21
- 20
- 19
- 18
- 17
- 16
- 15
- 14
- 13
- 12
- 11
- 10
- 9
- 8
- 7
- 6
- 5
- 4
- 3
- 2
- 1



53

52

51

50

49

48

Name:

47

46

Date of Birth:

45

44

School Name:

43

42

School Code:

41

40

Centre:

39

38

Parish:

37

36

Name of Test:

PERFORMANCE TASK 2022 - MATHEMATICS

35

34

33

32

31

30

29

28

27

26

25

24

23

22

GENERAL INSTRUCTIONS

21

20

Read the instructions below before answering the questions in the booklet:

19

18

1. Your booklet contains four (4) questions. Write the answer to all four questions in your test booklet.

17

16

2. Read each instruction carefully, before responding to the questions in each section.

15

14

3. Ensure that all questions are answered.

13

12

DO NOT OPEN THIS BOOKLET UNTIL TOLD TO DO SO

11

10

9

8

BOOKLET # ASSIGNED

7



6

5

MOEYI/SAU/G4PT/Mathematics/'22

12

4

PLEASE DO NOT WRITE IN THIS AREA



{bookletNo}

3

2

1

IDENTIFICATION NUMBER

0	1	2	3	4	5	6	7	8	9
0	1	2	3	4	5	6	7	8	9
0	1	2	3	4	5	6	7	8	9
0	1	2	3	4	5	6	7	8	9
0	1	2	3	4	5	6	7	8	9
0	1	2	3	4	5	6	7	8	9
0	1	2	3	4	5	6	7	8	9
0	1	2	3	4	5	6	7	8	9
0	1	2	3	4	5	6	7	8	9
0	1	2	3	4	5	6	7	8	9

DO NOT WRITE OR MAKE ANY MARK IN THIS BLOCK OR CHANGE ANYTHING IN IT

A Absent

SCHOOL CODE

0	1	2	3	4	5	6	7	8	9
0	1	2	3	4	5	6	7	8	9
0	1	2	3	4	5	6	7	8	9
0	1	2	3	4	5	6	7	8	9
0	1	2	3	4	5	6	7	8	9