



Ministry of Education, Youth and Information

Primary Exit Profile (PEP 6)

April 2022

Curriculum-Based Test Social Studies

Time: 1 hour 30 minutes

Write your name and the name of your school below:

Name of Student

Name of School

DO NOT OPEN THIS BOOKLET UNTIL TOLD TO DO SO

MOEYI/SAU/C Form 1110-202202-VIII

PLEASE DO NOT WRITE IN THIS AREA



[SERIAL]

- 53
- 52
- 51
- 50
- 49
- 48
- 47
- 46
- 45
- 44
- 43
- 42
- 41
- 40
- 39
- 38
- 37
- 36
- 35
- 34
- 33
- 32
- 31
- 30
- 29
- 28
- 27
- 26
- 25
- 24
- 23
- 22
- 21
- 20
- 19
- 18
- 17
- 16
- 15
- 14
- 13
- 12
- 11
- 10
- 9
- 8
- 7
- 6
- 5
- 4
- 3
- 2
- 1

- 53
- 52
- 51
- 50
- 49
- 48
- 47
- 46
- 45
- 44
- 43
- 42
- 41
- 40
- 39
- 38
- 37
- 36
- 35
- 34
- 33
- 32
- 31
- 30
- 29
- 28
- 27
- 26
- 25
- 24
- 23
- 22
- 21
- 20
- 19
- 18
- 17
- 16
- 15
- 14
- 13
- 12
- 11
- 10
- 9
- 8
- 7
- 6
- 5
- 4
- 3
- 2
- 1

This page is intentionally blank

53
52
51
50
49
48
47
46
45
44
43
42
41
40
39
38
37
36
35
34
33
32
31
30
29
28
27
26
25
24
23
22
21
20
19
18
17
16
15
14
13
12
11
10
9
8
7
6
5
4
3
2
1

Instructions:

For items 1 to 34 there is only one (1) correct answer. Indicate your response to each item by shading the letter next to the answer you choose. An example is given below.

Example

Which of the following is the capital of Jamaica?

- A Savanna-la-mar
- B Montego Bay
- C St. Ann's Bay
- D Kingston

"D" is shaded because it is the only correct answer.

1. Which group of people came to Jamaica as indentured servants in 1854?
The _____.
 - A Africans
 - B East Indians
 - C Chinese
 - D Lebanese

2. Mr. Hassan and his family moved from Syria to live in Jamaica. In Jamaica, Mr. Hassan is a/an _____.
 - A emigrant
 - B immigrant
 - C slave
 - D tourist

PLEASE DO NOT WRITE IN THIS AREA



[SERIAL]

53
52
51
50
49
48
47
46
45
44
43
42
41
40
39
38
37
36
35
34
33
32
31
30
29
28
27
26
25
24
23
22
21
20
19
18
17
16
15
14
13
12
11
10
9
8
7
6
5
4
3
2
1

3. Which of the following events happened first in Jamaica's history?
- A Universal Adult Suffrage
 - B The Morant Bay Rebellion
 - C Emancipation
 - D Jamaica's Independence
4. Why did the East Indians migrate to the Caribbean during the 19th century? They migrated for _____.
- A better educational opportunities
 - B opportunities to worship freely
 - C opportunities to experience Caribbean culture
 - D employment opportunities

Read the statement below then use it to answer item 5.

Life for the Chinese indentured servants was **not** what they expected.

5. Which of the following **BEST** supports the statement? Chinese indentured servants _____.
- A got days off and had shorter work days
 - B received excellent medical care
 - C lived on overcrowded plantations
 - D were overworked and overpaid

Read the passage below then use it to answer item 6.

Before apprenticeship, enslaved Africans as well as their children had to work for long hours. But the days when plantation owners could force former enslaved Africans to work eighteen hours a day were no more. Under apprenticeship, the former enslaved Africans were supposed to only work 40 hours per week. In addition, children under six years old had to be freed.

Source: SAU

6. Based on the information in the passage, which conclusion is **TRUE**?
- (A) During apprenticeship, the former enslaved Africans worked shorter hours.
 - (B) Under apprenticeship former enslaved Africans had to work throughout the night.
 - (C) Plantation owners welcomed the apprenticeship system.
 - (D) Former enslaved Africans chose the days they wanted to work during apprenticeship.

Read the passage below then use it to answer item 7.

Alton wants to interview the president of a Heritage Club in his parish. He wants to get information about the experiences of East Indian immigrants on sugar plantations during the 19th and 20th century.

7. Which question should Alton ask in order to get the information he needs?
- (A) Where did the East Indian immigrants come from?
 - (B) When were the East Indian immigrants brought to Jamaica?
 - (C) Which plantations did the East Indian immigrants work on?
 - (D) What conditions did the East Indian immigrants endure on plantations?

PLEASE DO NOT WRITE IN THIS AREA



[SERIAL]

53
52
51
50
49
48
47
46
45
44
43
42
41
40
39
38
37
36
35
34
33
32
31
30
29
28
27
26
25
24
23
22
21
20
19
18
17
16
15
14
13
12
11
10
9
8
7
6
5
4
3
2
1

53
52
51
50
49
48
47
46
45
44
43
42
41
40
39
38
37
36
35
34
33
32
31
30
29
28
27
26
25
24
23
22
21
20
19
18
17
16
15
14
13
12
11
10
9
8
7
6
5
4
3
2
1

8. In Jamaica, the Hosay Festival is **frequently** celebrated among the _____.
- A Africans
 - B East Indians
 - C Chinese
 - D Europeans

Read the statement below then use it to answer item 9.

The Chinese and East Indians have made significant contributions to Jamaica’s economy.

9. Which source would **BEST** provide factual and reliable information to support this statement?
- A a Chinese business owner's diary with entries about how his business in Jamaica has profited over the last five years
 - B a conversation between two customers who each shop at immigrant-owned establishments in Jamaica
 - C a World Bank business report stating the growth and resulting effects of immigrant-owned businesses in Jamaica
 - D two advertisements promoting the goods and services offered by Chinese and East Indian business establishments in Jamaica

53
52
51
50
49
48
47
46
45
44
43
42
41
40
39
38
37
36
35
34
33
32
31
30
29
28
27
26
25
24
23
22
21
20
19
18
17
16
15
14
13
12
11
10
9
8
7
6
5
4
3
2
1

10. Which was **NOT** an achievement of Sir Alexander Bustamante?
He _____.

- (A) founded the Jamaica Labour Party (JLP)
- (B) was the first Prime Minister of Jamaica
- (C) won Jamaica’s first election under Universal Adult Suffrage
- (D) formed the United Negro Improvement Association

Read the passage below then use it to answer item 11.

Festivals generally showcase the customs, traditions and certain aspects of the historical life of a country. Festivals are also used to celebrate important events in a family, community or nation.

11. Based on information in the passage, which conclusion can be drawn about the importance of festivals?
Festivals are _____.

- (A) celebrations of customs and traditions only
- (B) significant to some ethnic groups
- (C) organized to celebrate national events only
- (D) ways of displaying and promoting culture

12. Every year, on a particular day, Jamaicans celebrate the removal of British control over specific functions of our country.
This day is called _____.

- (A) Labour Day
- (B) Emancipation Day
- (C) Jamaica Day
- (D) Independence Day



53
52
51
50
49
48
47
46
45
44
43
42
41
40
39
38
37
36
35
34
33
32
31
30
29
28
27
26
25
24
23
22
21
20
19
18
17
16
15
14
13
12
11
10
9
8
7
6
5
4
3
2
1

13. Which leader was involved in the independence movement in Cuba?

- A Norman Manley
- B Fidel Castro
- C Jose Marti
- D Jean-Jacques Dessalines

14. A dependent country in the Caribbean may **NOT** want to seek independence because it chooses to _____.

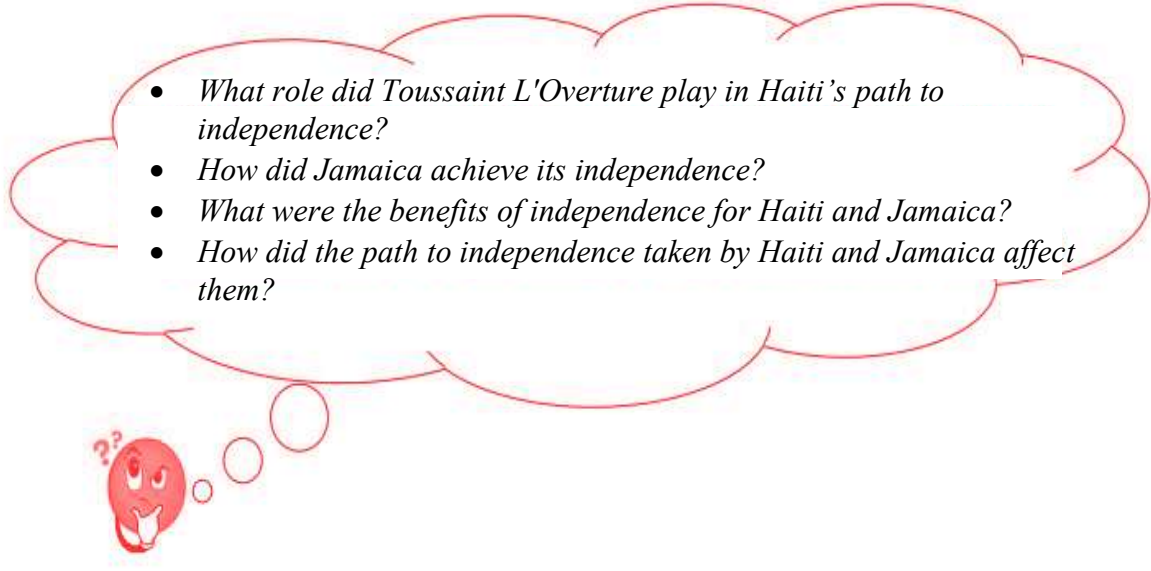
- A be defended and aided by its mother country
- B develop its natural resources and enjoy its culture
- C control all its affairs and develop its own resources
- D have a type of government that differs from that of most Caribbean countries

15. How was the path to independence for Jamaica different from that of Cuba?
The countries paths were different because_____.

- A the leaders in Jamaica started political parties while Cuba's leaders did not
- B Jamaica gained independence in the 20th century while Cuba gained it before
- C Jamaica's leaders joined with other countries while Cuba's leaders endured on their own
- D the leaders in Jamaica negotiated with their colonizers while Cuba's leaders engaged in revolutions



Alex used the four questions below to gather information for his research. Read them carefully then use them to answer item 16.



16. Which of the following is **most likely** the focus of Alex's research?

- (A) What are the benefits of being an independent nation?
- (B) In what ways did the path to independence taken by Jamaica and Haiti impact how they function today?
- (C) Who were the main persons involved in Jamaica and Haiti achieving independence?
- (D) How are independent and dependent countries similar?

17. Which **BEST** describes one way in which both Jamaica and Haiti celebrate their Independence Day?
They both celebrate by _____.

- (A) having traditional dances as the main feature
- (B) drinking 'Soup Joumou' pumpkin soup
- (C) hosting a festival song competition
- (D) organizing nationwide celebrations

PLEASE DO NOT WRITE IN THIS AREA



[SERIAL]

53
52
51
50
49
48
47
46
45
44
43
42
41
40
39
38
37
36
35
34
33
32
31
30
29
28
27
26
25
24
23
22
21
20
19
18
17
16
15
14
13
12
11
10
9
8
7
6
5
4
3
2
1

18. A citizen of a dependent country is **most likely** to _____.

- A vote for leaders who manage all the country's affairs
- B follow decisions and policies made by the mother country
- C obey the laws made by their parliament only
- D use a visa to travel to their mother country

19. A Grade 6 student has to write an essay on Jamaica's reason for seeking independence. Which source would be **LEAST** helpful for writing the essay?

- A entries about the events leading up to Independence Day from the personal diary of Norman Manley
- B a Civics textbook
- C newspaper articles on Jamaica's withdrawal from the West Indies Federation
- D a poster advertising Independence Day celebration

53
52
51
50
49
48
47
46
45
44
43
42
41
40
39
38
37
36
35
34
33
32
31
30
29
28
27
26
25
24
23
22
21
20
19
18
17
16
15
14
13
12
11
10
9
8
7
6
5
4
3
2
1

Read the source below then use it to answer items 20 and 21.

The Many Moods of the Caribbean

The Caribbean Festival of Arts also known as CARIFESTA is a multicultural event organized by countries of the Caribbean. The festival, held every four years, allows artists, musicians and authors from the Caribbean and Latin America to showcase their work.

CARIFESTA has become an equally important event for persons exhibiting their work as well as for lovers of Caribbean culture. The festival is a demonstration of Caribbean unity and diversity.

CARIFESTA, since its first staging in San Juan, Puerto Rico in 1952, has been an avenue for celebrating excellence in Caribbean cultural practices.



Source: (Adapted) <https://caricom.org/carifesta-through-the-years>

20. Based on the information in the source, which **BEST** illustrates what CARIFESTA helps to maintain?
- (A) building designs
 - (B) religion
 - (C) language
 - (D) heritage
21. CARIFESTA is an **EFFECTIVE** way of preserving Caribbean culture. Do you agree with this statement?
- (A) Yes: Because it exposes the region to the unique expressions, creativity and life of the people in each country.
 - (B) Yes: Because it showcases the gifts and talents of people from countries who were once ruled by Britain only.
 - (C) No: Because it showcases the culture of countries outside of the Caribbean.
 - (D) No: Because it is often held in the same country and many Caribbean territories do not participate.



53
52
51 Read Sources 1 and 3 below and examine Source 2 closely then use them to answer items
50 22 and 23.
49

48 Source 1

47 Each symbol in Jamaica's Coat of Arms has a meaning. The Tainos were the first people
46 who lived in Jamaica. The crocodile is indigenous to the island. Pineapples represent the
45 island's native fruits, and the helmet and mantling are symbols of Jamaica's past status as a
44 British colony.
43

Source: (Adapted) [https:// www.onlyinnajamaica.com/jamaica/coat-of-arms/](https://www.onlyinnajamaica.com/jamaica/coat-of-arms/)


42 Source 2



1906



1957



1962

31
30 Source 3

29
28
27
26
25
24
23
22
21
20
19
18
17
16
15
14
13
12
11
10
9
8
7
6
5
4
3
2
1

7 Park Road
Lime Grove P.O
St. Claire
September 16, 2021

Dear Carlos,

How are you? I was sitting at home bored yesterday after the wifi went down. So I decided to read my Social Studies textbook. I learnt so much! Let me share some of it with you. Did you know that Jamaica's Coat of Arms changed many times? Yes it did!

Year	Description of Change
1875	a crocodile and pineapples were added
1906	the Tainos and the motto (written in Latin) were added to what already existed. The meaning of the motto in English was: "the two Indians will serve as one."
1957	the helmet and mantling were added to what already existed.

In Jamaica there are people from many different ethnic backgrounds and cultures. This led to another change in the Coat of Arms in 1962. Anyway, I have to go now. I hear my mom calling me.

Your friend,
Carl

Source: (Adapted) [https:// www.onlyinnajamaica.com/jamaica/coat-of-arms/](https://www.onlyinnajamaica.com/jamaica/coat-of-arms/)

22. Based on the sources, which is the **most recent** change made to the Jamaican Coat of Arms?
- (A) The helmet was changed.
 - (B) The crocodile was added.
 - (C) The motto was changed.
 - (D) The pineapples were added.
23. Which source(s) provide(s) an explanation for why parts of Jamaica’s Coat of Arms were changed over the years?
- (A) Source 1
 - (B) Source 2
 - (C) Source 3
 - (D) All of the sources

A line from Jamaica’s National Anthem is shown below. Use it to answer item 24.

“Teach us true respect for all...”

24. Which idea is being promoted in this line?
It is promoting_____.
- (A) personal ambitions
 - (B) regard for others
 - (C) disunity and injustice
 - (D) cultural awareness

PLEASE DO NOT WRITE IN THIS AREA



[SERIAL]

53
52
51
50
49
48
47
46
45
44
43
42
41
40
39
38
37
36
35
34
33
32
31
30
29
28
27
26
25
24
23
22
21
20
19
18
17
16
15
14
13
12
11
10
9
8
7
6
5
4
3
2
1

53
52
51
50
49
48
47
46
45
44
43
42
41
40
39
38
37
36
35
34
33
32
31
30
29
28
27
26
25
24
23
22
21
20
19
18
17
16
15
14
13
12
11
10
9
8
7
6
5
4
3
2
1

25. The line “*the wisdom and courage of my mind...*” is taken from Jamaica’s _____.

- A National Pledge
- B National Anthem
- C National Song for Schools
- D National Prayer

26. Why is it important for Jamaica to have its own national symbols and emblems? These symbols and emblems _____.

- A will ensure that Jamaica’s products are easily identified
- B are a representation of Jamaica’s history, values and uniqueness
- C will ensure that citizens become more loyal to Jamaica and its nation builders
- D remind Jamaican citizens of their roles and responsibilities

27. Which strategy presents the **most effective** way of helping young people in a community to become more aware of the Jamaican culture?

- A placing posters of famous actors/actresses throughout the community
- B hosting community meetings to discuss the changes in Caribbean culture
- C staging a community concert with international singers
- D staging an annual cultural talent competition in the community

The passage below shows a speaker’s response to a question posed at a meeting. Read it carefully then use it to answer item 28.

“We want to encourage everybody to get involved in our Jamaican culture. Let us begin by creating Culture Clubs in schools. We want Culture Club members to participate in various cultural activities such as the Festival of the Performing Arts, Mello-Go-Roun', Miss Lou Day, and Jamaica Day; so that they can get a greater understanding and appreciation of Jamaican culture.”

Source: (Adapted) jis.gov.jm

28. Which question was the speaker **most likely** responding to?
- (A) How is the Jamaican culture unique?
 - (B) How can we get children to become members of a Culture Club?
 - (C) How can children become exposed to the Jamaican culture?
 - (D) How will children benefit from Jamaica Day activities in their school?
29. Which mountain range can be found on the continent of North America?
- (A) Himalayas
 - (B) Alps
 - (C) Rocky Mountains
 - (D) Andes

53
52
51
50
49
48
47
46
45
44
43
42
41
40
39
38
37
36
35
34
33
32
31
30
29
28
27
26
25
24
23
22
21
20
19
18
17
16
15
14
13
12
11
10
9
8
7
6
5
4
3
2
1

The table below provides information about two communities. One is near the Sandy Mountain Range on the Leeward side, the other is in the Sandy Mountain Range on the Windward side. Use it to answer item 30.

Community	Location <i>(side of mountain)</i>	Height Above Sea Level (m)	Average Annual Temperature (°C)	Average Annual Rainfall (mm)
Blue Gap	Windward	2578	16	6000
Big Tree Village	Leeward	20	25	813

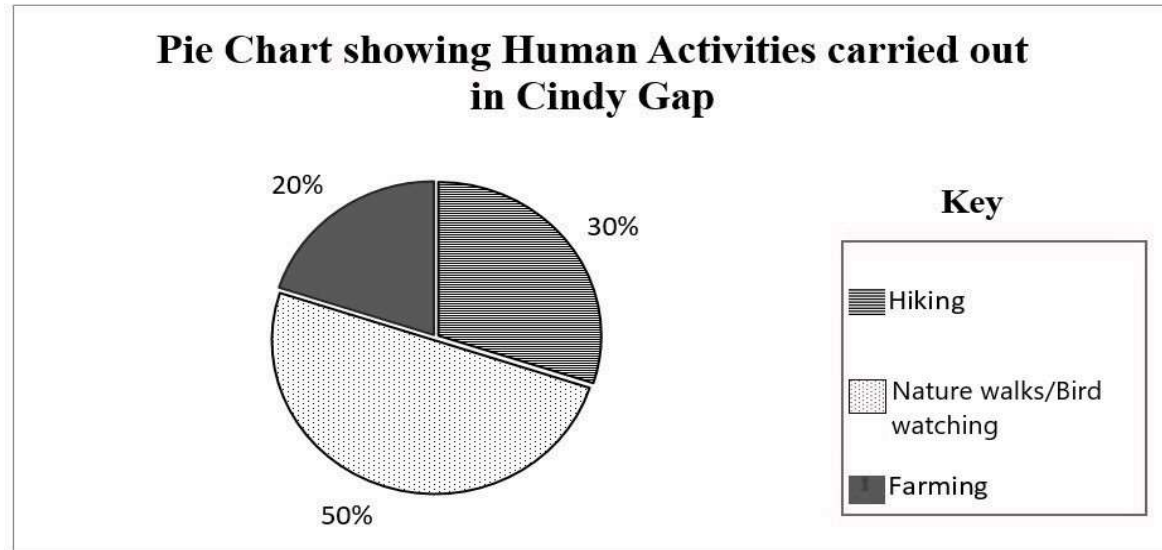
30. Based on the information in the table, which statement gives the **BEST** explanation for the amount of rainfall each community receives?
- (A) Blue Gap receives more rainfall because of its location on the mountain and higher altitude.
 - (B) Big Tree Village receives less rainfall only because of its temperature and altitude.
 - (C) Big Tree Village receives less rainfall because of its altitude only.
 - (D) Blue Gap and Big Tree Village receive different amounts of rainfall because they are located far apart.

PLEASE DO NOT WRITE IN THIS AREA



[SERIAL]

Examine the pie chart below. Use it to answer item 31.



31. Which statement is most likely **TRUE** about the community of Cindy Gap? Cindy Gap is located on a _____.

- (A) lowland which has very little environmental value
- (B) highland which is degraded
- (C) lowland of great economic and social value
- (D) highland of great environmental and recreational value

32. Which is **most likely** a direct effect of mining in mountain environments?

- (A) destruction of wild life habitat
- (B) more heavy and intense rainfall
- (C) increase in tourism activities
- (D) climate change

53
52
51
50
49
48
47
46
45
44
43
42
41
40
39
38
37
36
35
34
33
32
31
30
29
28
27
26
25
24
23
22
21
20
19
18
17
16
15
14
13
12
11
10
9
8
7
6
5
4
3
2
1

53
52
51
50
49
48
47
46
45
44
43
42
41
40
39
38
37
36
35
34
33
32
31
30
29
28
27
26
25
24
23
22
21
20
19
18
17
16
15
14
13
12
11
10
9
8
7
6
5
4
3
2
1

A group of grade six students went to the Gray Mountain National Park on a field trip. The list below shows a student’s response to a question given on the field trip worksheet. Use it to answer item 33.

A Student’s Response to Field Trip Worksheet Question

•	
➤	<i>Tourist fishing</i>
➤	<i>Scouts camping</i>
➤	<i>Men planting trees on a forest farm</i>
•	

33. Which question is the student **most likely** answering?
- (A) Which activities do the children enjoy in mountain environments?
 - (B) How important are mountain environments to citizens?
 - (C) What are some services that tourists enjoy in mountain environments?
 - (D) What activities are carried out in mountain environments?
34. Why are forest reserves important?
They_____.
- (A) provide employment for lumber jacks
 - (B) restrict the number of persons who visit the forest
 - (C) create more opportunities for hunting and bird shooting
 - (D) protect plants and animals

PLEASE DO NOT WRITE IN THIS AREA



[SERIAL]

Instructions:

For items 35 to 40 indicate your response to each item by shading the appropriate letter in each row of the table given. Only one letter is to be shaded in each row. An example is given below.

Example

For each parish listed in the table below, shade the appropriate letter in the row to indicate the county to which each parish belongs.

Parish	Cornwall	Middlesex	Surrey
St. Andrew	A	B	C
Westmoreland	A	B	C
Clarendon	A	B	C

St. Andrew is in Surrey therefore "C" is shaded in that row.

Westmoreland is in Cornwall therefore "A" is shaded in that row.

Clarendon is in Middlesex therefore "B" is shaded in that row.

53
52
51
50
49
48
47
46
45
44
43
42
41
40
39
38
37
36
35
34
33
32
31
30
29
28
27
26
25
24
23
22
21
20
19
18
17
16
15
14
13
12
11
10
9
8
7
6
5
4
3
2
1

35. For **each** statement in the table, shade the appropriate letter in each row to indicate whether the statement describes **either** activities that are carried out in mountain environments **or** goods that are produced in mountain environments.

Statement	Activity carried out	Goods produced
lumber for furniture	A	B
guided tours of the forest	A	B

PLEASE DO NOT WRITE IN THIS AREA



[SERIAL]

Read the information in Source 1 and Source 2 then use it to answer item 36.

Source 1

Diwali, Festival of Lights

- A sacred celebration of Hindus
- Children dress in brightly coloured costumes and act out parts of stories
- During the celebration various food and sweets are eaten
- On the final day of celebration lamps are lit and placed around houses and on the streets

Source 2

We have lost the true meaning of Christmas. It is about celebrating the birth of Jesus. Now, the season is more about fun, gifts, money and entertainment.

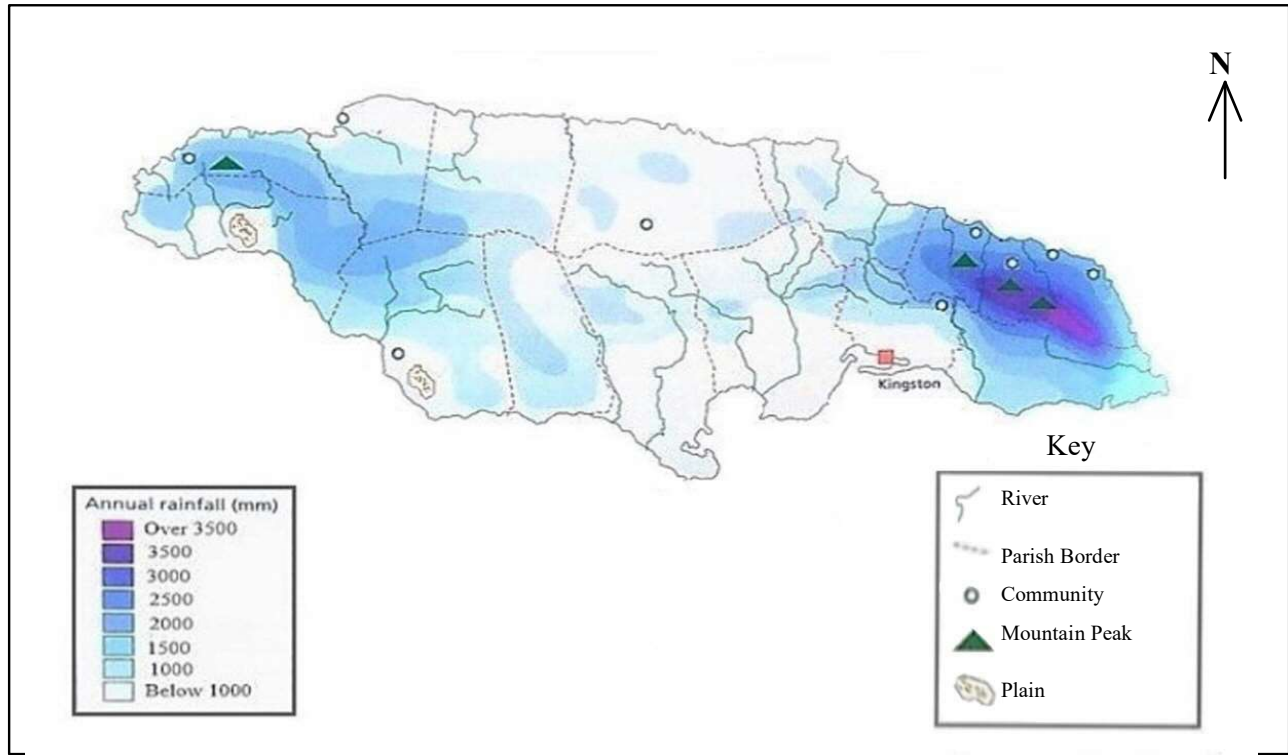
36. For each statement in the table below, shade the appropriate letter in each row to indicate whether it is supported by **Source 1**, **Source 2**, or **Both Sources**.

Statement	Source 1	Source 2	Both Sources
Some festivals are celebrations of important aspects of religion.	A	B	C
The purpose of some festivals is not always emphasised during the celebration.	A	B	C

53
52
51
50
49
48
47
46
45
44
43
42
41
40
39
38
37
36
35
34
33
32
31
30
29
28
27
26
25
24
23
22
21
20
19
18
17
16
15
14
13
12
11
10
9
8
7
6
5
4
3
2
1

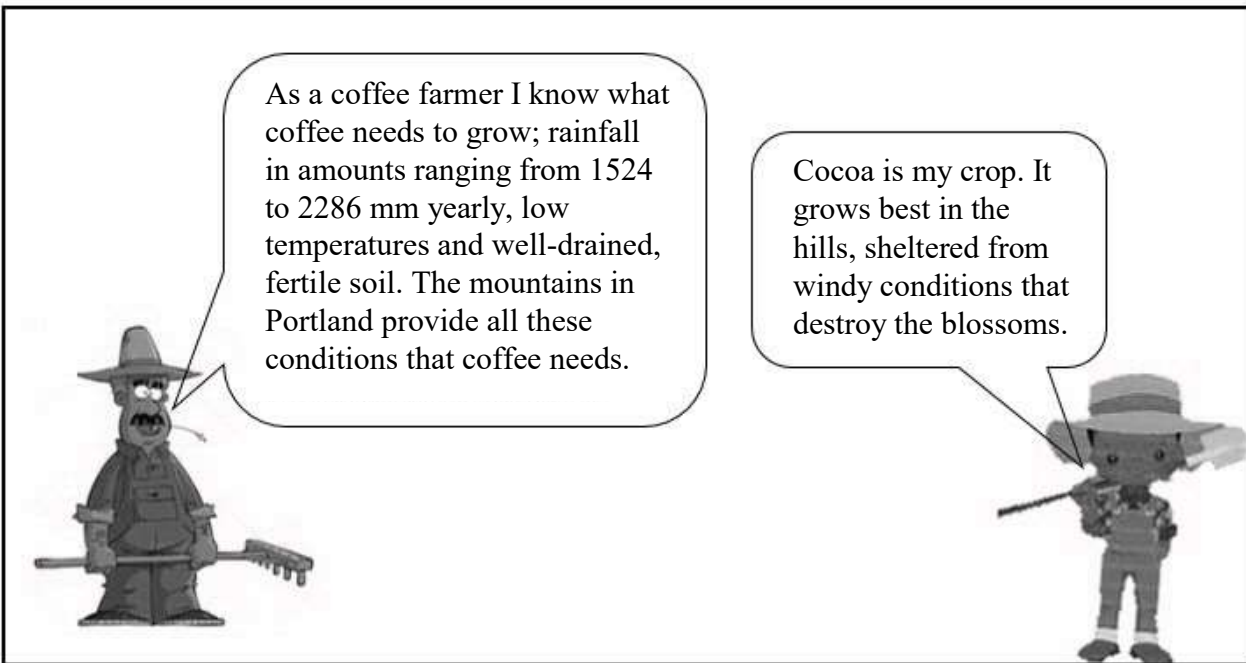
Examine the map of Jamaica in Source 1 and read the conversation between two farmers in Source 2. Use them to answer item 37.

Source 1 **Map of Jamaica showing Average Annual Rainfall**



Source: (Adapted) Jamaica Primary Social Studies Book 6

Source 2



Source: (Adapted) Jamaica Primary Social Studies Book 6

PLEASE DO NOT WRITE IN THIS AREA



[SERIAL]

37. Based on the sources given, shade the appropriate letter in each row to indicate whether **each** conclusion made about the significance of mountains is **True** or **False**.

Conclusion	True	False
Coastal communities that are close to a highland have better natural water supply.	Ⓐ	Ⓑ
Coffee can be grown in parts of St. Mary.	Ⓐ	Ⓑ
Areas such as Georges Plain and Pedro Plain are ideal for the cultivation of cocoa.	Ⓐ	Ⓑ

53
52
51
50
49
48
47
46
45
44
43
42
41
40
39
38
37
36
35
34
33
32
31
30
29
28
27
26
25
24
23
22
21
20
19
18
17
16
15
14
13
12
11
10
9
8
7
6
5
4
3
2
1

53
52
51
50
49
48
47
46
45
44
43
42
41
40
39
38
37
36
35
34
33
32
31
30
29
28
27
26
25
24
23
22
21
20
19
18
17
16
15
14
13
12
11
10
9
8
7
6
5
4
3
2
1

Read the three solutions outlined below. They describe ways in which we can reduce the negative effects of human activities on mountains. Use these solutions to answer item 38.

Solution A	Solution B	Solution C	Solution D
create protected areas and apply strict regulations for use	practise contour ploughing, mulching, and terracing	construct retaining walls	minimise the use of chemical fertilizers

38. The table below shows **three effects human activities** have on mountains. For **each** effect given, shade the appropriate letter in each row to indicate which solution would **best** reduce the effect.

Human Activity and its Effect on Mountain Environments	Solution			
building roads resulting in landslides	A	B	C	D
loss of habitat and wildlife due to human interactions	A	B	C	D
farming on mountains causing soil erosion	A	B	C	D



53
52
51
50
49
48
47
46
45
44
43
42
41
40
39
38
37
36
35
34
33
32
31
30
29
28
27
26
25
24
23
22
21
20
19
18
17
16
15
14
13
12
11
10
9
8
7
6
5
4
3
2
1

A student was given the research question below. Use it to answer item 39.

How can festivals be used to preserve Caribbean culture?

39. A list of available sources is provided in the table below. For each source, shade the appropriate letter in the row to indicate whether it will provide **helpful information** or **unhelpful information** to complete this assignment.

Available Source	Helpful Information	Unhelpful Information
Newspaper articles about the importance of festivals.	Ⓐ	Ⓑ
A tourist's online blog about his/her cultural preferences.	Ⓐ	Ⓑ
A book published by Jamaica Heritage Trust entitled, "How can I promote and preserve Caribbean culture?"	Ⓐ	Ⓑ

53
52
51
50
49
48
47
46
45
44
43
42
41
40
39
38
37
36
35
34
33
32
31
30
29
28
27
26
25
24
23
22
21
20
19
18
17
16
15
14
13
12
11
10
9
8
7
6
5
4
3
2
1

Read the three sources below then use them to answer item 40.

Source 1: Taken from Ann's Youtube Channel

The first group of East Indians came to Jamaica to showcase their fashionable clothing such as the Sarees and unique gold and silver jewellery. These are even more popular today than they were in the past, and are sold in local stores.

Source 2: Article from the Jamaica Information Service (JIS)

Most Chinese immigrants came to the Caribbean to work on plantations. However, they disliked it and soon left the plantations to set up small grocery shops all across the island. Many of these businesses grew into large enterprises embracing not only retail, but also wholesale selling and other types of activities.

Source 3: Advertisement in a Local Newspaper

DRAGON SPOT CHINESE RESTAURANT



The **ONLY** spot for authentic Chinese Cuisine!

Come and enjoy our really delicious...

Sweet and Sour Chicken
Kung Pao Chicken
Chow mein
Curried Chicken
Spring Rolls



WE ARE THE BEST!!!!

Shop # 16
Rose Mall

PLEASE DO NOT WRITE IN THIS AREA



[SERIAL]

40. For each statement in the table below, shade the appropriate letter in each row to indicate whether it is supported by **Source 1**, **Source 2**, **Source 3** or **All Three Sources**.

Statement	Source 1	Source 2	Source 3	All Three Sources
Immigrant groups have contributed to growth of Jamaica's business sector.	A	B	C	D
Immigrant groups brought their unique fashion to the Caribbean.	A	B	C	D
The source (s) contain (s) information that is most likely factual and reliable.	A	B	C	D

- 53
- 52
- 51
- 50
- 49
- 48
- 47
- 46
- 45
- 44
- 43
- 42
- 41
- 40
- 39
- 38
- 37
- 36
- 35
- 34
- 33
- 32
- 31
- 30
- 29
- 28
- 27
- 26
- 25
- 24
- 23
- 22
- 21
- 20
- 19
- 18
- 17
- 16
- 15
- 14
- 13
- 12
- 11
- 10
- 9
- 8
- 7
- 6
- 5
- 4
- 3
- 2
- 1

